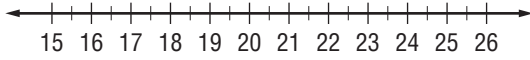


Skills Practice

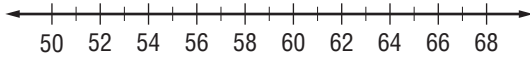
Box Plots

Draw a box plot for each set of data.

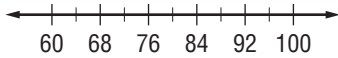
1. {23, 19, 20, 22, 17, 15}



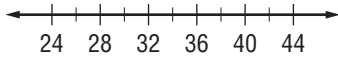
2. {54, 61, 58, 68, 66, 51, 66}



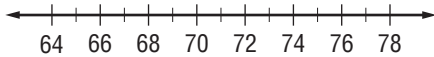
3. {61, 96, 100, 87, 82, 91, 96, 86}



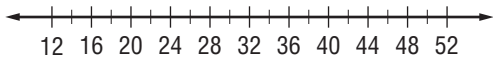
4. {27, 35, 35, 30, 26, 34, 42, 27, 37}



5. {66, 72, 78, 69, 64, 70, 67, 72, 66}

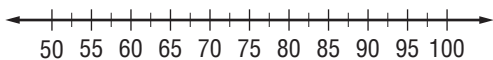


6. {39, 41, 30, 14, 44, 41, 50, 39, 42, 36}



7.

Greyhounds Basketball Scores									
86	83	56	73	81	64	95	84	79	90



8.

Golf Scores for 9 Holes							
45	58	52	58	40	56	61	47

